



**CAPITAL
TUITION
GROUP.**

Northern Ireland

'SEAG' Style Practice Test 2

This assessment is not an official material of SEAG.

English Test

Punctuation Exercise

In these types of questions, you are looking for either **one** punctuation mistake or **no** punctuation mistake.

Choose which group of words you think has the mistake in it and mark its letter on your answer sheet.

If you can't find a mistake, mark N.

1) How were they able to get to the show on time.

A	B	C	D	N
---	---	---	---	---

2) She wouldve gone if it wasn't for her wet hair.

A	B	C	D	N
---	---	---	---	---

3) They told him, that he wasn't allowed to go out of the park.

A	B	C	D	N
---	---	---	---	---

4) They opened their eggs for the easter celebrations.

A	B	C	D	N
---	---	---	---	---

5) "I can't believe it's only Tuesday" the girl huffed to her friend.

A	B	C	D	N
---	---	---	---	---

In these types questions you have to choose the **most appropriate** word or group of words to complete each numbered line so that the passage makes sense and is written in standard English.

Choose the most appropriate answer and **mark its letter on your answer sheet.**

6) She looked at her phone

A	B	C	D
calmly	slowly	frantically	happily

when she saw the smoke in the distance.

7)

A	B	C	D
They're	There	Their	Hair

not allowed into the park past 5pm.

8) The sea was

A	B	C	D
serene	tranquil	violent	peaceful

during the storm.

9) Three electricians

A	B	C	D
fixed	fixing	fix	amending

the issue with the power source.

10)

A	B	C	D
After	Before	During	When

the show, you mustn't forget your lines.

In these types of questions there are some **spelling** mistakes. On each question there is either **one** mistake or **no** mistake.

Find the group of words with the mistake in it and **mark its letter on your answer sheet**. If there is no mistake, **mark N**.

11) Many of the students were worried about their results.

A	B	C	D	N
----------	----------	----------	----------	----------

12) Once the performance was over, the actors celebrated.

A	B	C	D	N
----------	----------	----------	----------	----------

13) There were several teachers who worked hard for the children.

A	B	C	D	N
----------	----------	----------	----------	----------

14) The magician held the wand and made the box disappear.

A	B	C	D	N
----------	----------	----------	----------	----------

15) In ancient Egypt, there are many complex wonders to see.

A	B	C	D	N
----------	----------	----------	----------	----------

Read the whole text below to yourself before answering the questions.

- 1) Gemma was only five minutes away from her parents' hut, but the jungle had already taken on a different
- 2) personality.
- 3) It was thicker. The trees had grown taller. The plants shaded the green forest a sinister red. There was no
- 4) doubt about it- the jungle was more dangerous here, and Gemma loved it.
- 5) As a baby, Gemma's parents had taken her on their expeditions over mountains, deserts, and vast seas.
- 6) It was exciting, unpredictable, and deeply irresponsible.
- 7) Now that they had settled down in the tropical rainforest, Gemma had to devise intricate plans just to sneak
- 8) out for morning adventures. This particular plan hinged on the help of Milo, her ring-tailed lemur.
- 9) Years of mischief, tom-foolery, and Gemma's influence had helped Milo develop skills that other lemurs would
- 10) give theirs rings to have themselves, were such a transaction to be made possible.
- 11) And on this morning, Milo was lying in Gemma's bed, wearing a wig made of straw, the same sandy blonde
- 12) colour as Gemma's hair, snoring loudly. In a stroke of genius, they had even braided it into pigtails to match
- 13) her style. They tried adding a pair of her old glasses but those kept sliding down his face, given that she had a
- 14) human-sized head, and his was irreparably lemur-sized.

15) “I swear, her snoring is getting worse and worse,” said Gemma’s dad from the breakfast table, sipping on a warm tea.
16) Gemma’s mom raised an eyebrow from across her book. “It doesn’t even sound human!” he continued.
17) “You’re exaggerating a little, don’t you think, dear?” Gemma’s mom said. But he was not. And had either of them walked
18) one room over to check on their daughter, they may have shouted, and woken up a little, groggy primate with straw
19) pigtailed. A short walk away, Gemma brushed past a prickly bush and followed a small break in the twisted liana vines.
20) She came to a wall of leaves and grew excited at the sound of movement ahead. She often felt like she could sense
21) when adventure was near. In fact, she felt it almost every single day, and for the past year, she had been wrong roughly
22) every single time. So, despite the eagerness to find something remarkable, her shock was genuine when she brushed the
23) leaves aside. In a small clearing, no larger than a rock pond, was a black jaguar. She bravely, confidently, froze.

Please answer these questions. (Look at the text again if you need to.) You should choose the **best** answer and mark its letter on your answer sheet.

16) Name the punctuation used on: *parents'*

- A) comma
- B) Speech mark
- C) Apostrophe
- D) Exclamation mark

17) “It doesn’t even sound human!” he continued. (line 16)

Explain how this type of statement may have been said.

- A) In quiet voice.
- B) Maybe whispered.
- C) In an expressive way.
- D) In a calm voice.

18) Line 16, why did Gemma’s mum raise her eyebrows.

- A) She was shocked by what she heard.
- B) She didn’t care for what the man said.
- C) She read something interesting in the book.
- D) She had an itchy eyebrow.

Please answer these questions. (Look at the text again if you need to.) You should choose the **best** answer and mark its letter on your answer sheet.

19) From line 22, which word is a synonym for 'eagerness?'

- A) happiness
- B) willingness
- C) carelessness
- D) anxiousness

20) On Line 23, which of the words below is NOT an adverb?

- A) clearing
- B) aside
- C) bravely
- D) confidently

21) Looking at the text on line 17, which would be an appropriate synonym for said?

- A) shouted
- B) questioned
- C) mumbled
- D) told

22) What genre is the story?

- A) Science fiction.
- B) Romance
- C) Adventure
- D) Non-fiction

Please answer these questions. (Look at the text again if you need to.) You should choose the **best** answer and mark its letter on your answer sheet.

23) Which word is the past tense of 'sipping'?

- A) drank
- B) slurped
- C) sip
- D) sipped

24) Which word is the best synonym for the word 'dangerous'?

- A) treacherous
- B) innocuous
- C) safe
- D) gentle

For these types of questions you have to **write your answers**, neatly, in the boxes provided on your answer sheet.

25) On line 15, what was Gemma's dad drinking?

26) On line 5, which word is a synonym for journeys?

27) On line 8, which word is a synonym for specific?

28) On line 3, which word is an antonym for smaller?

29) On line 12, which word is a synonym for inter-weaved?

Maths Test

30) There are 1000 people in the hall.

450 are adults and there is a 50/50 split boys and girls.

How many boys are there?

- A) 450 B) 550 C) 225 D) 275
-


31) What is the decimal equivalent for 12%?

- A) 12.0 B) 0.102 C) 0.12 D) 0.12%
-

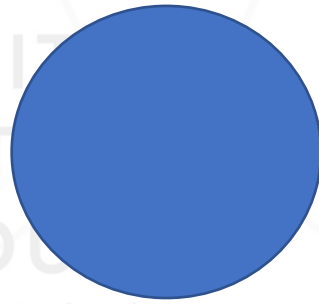
32) A garden has an area of $100m^2$

What could be the length of one side?


- A) 1m B) 3m C) 7m D) 9m



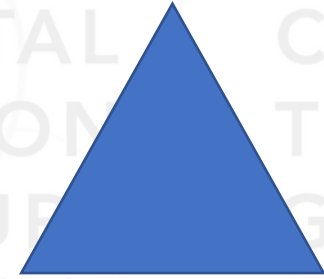
A



B



C







D

33)

Which of these shapes has only one line of symmetry?

34)

Which of these shapes has no lines of symmetry?

35)	Scotland	
	England	
	France	
	Spain	

Year 10 selected their favourite holiday destinations.

35 people chose France.

How many people chose either France, England or Spain?

- A) 105 B) 115 C) 35 D) 40

36) What are the next two numbers in the sequence?


12, 18, 24, 30, _____, _____

- A) 24, 18
- B) 36, 42
- C) 33, 36
- D) 60, 120

37) Which fraction is NOT equivalent to $\frac{3}{18}$?

- A) $\frac{1}{6}$
- B) $\frac{2}{12}$
- C) $\frac{3}{4}$
- D) $\frac{10}{60}$

38)



What fraction of the planes are orange?

A) $\frac{2}{4}$

B) $\frac{1}{6}$

C) $\frac{3}{8}$

D) $\frac{10}{16}$

39) Helen pays at the shop with a £10 note, she gets only one coin in her change.

Which of these amounts is NOT the cost of the item?

A) £9.00

B) £9.80

C) £8.90

D) £8.00

40) What is the percentage equivalent of the decimal 0.65?

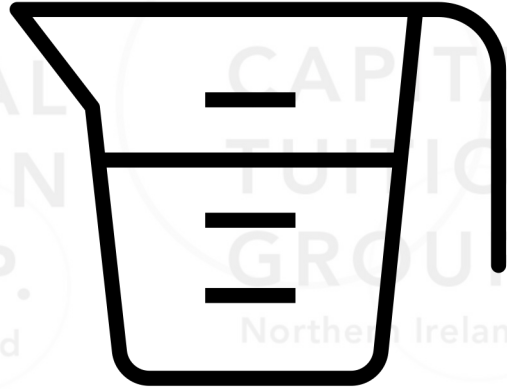
A) 65/100

B) 65%

C) 0.65%

D) 6.5%

41) This jug holds 0.6 litres of water.



How many 30 ml coffee cups can you fill using the water in the jug?



- A) 50
- B) 600
- C) 30
- D) 20

42) How many 30ml cups would you need to fill a 420ml jug?

- A) 12
- B) 10
- C) 14
- D) 13

43) At 2am, the temperature was -4°C

Six hours later, it was 10°C warmer

What was the temperature at 8am?

- A) 4°C
- B) 6°C
- C) $+4^{\circ}\text{C}$
- D) 14°C

44) A girl walked into a pizza shop and purchased two large pizzas. Both with an extra two toppings.

How much did she spend in total?

- A) £7.28
- B) £1.28
- C) £8.28
- D) £8.78

	Small	Medium	Large
Plain Pizza	£2.00	£2.75	£3.50
Each topping	£0.40	£0.52	£0.64
Soft drinks	£0.74	£0.86	£0.98

45) Here is a simplified ratio of some sweets.



Which ratio below shows an equivalent of this?

- A) 15:45
- B) 30:70
- C) 17:34
- D) 10:40

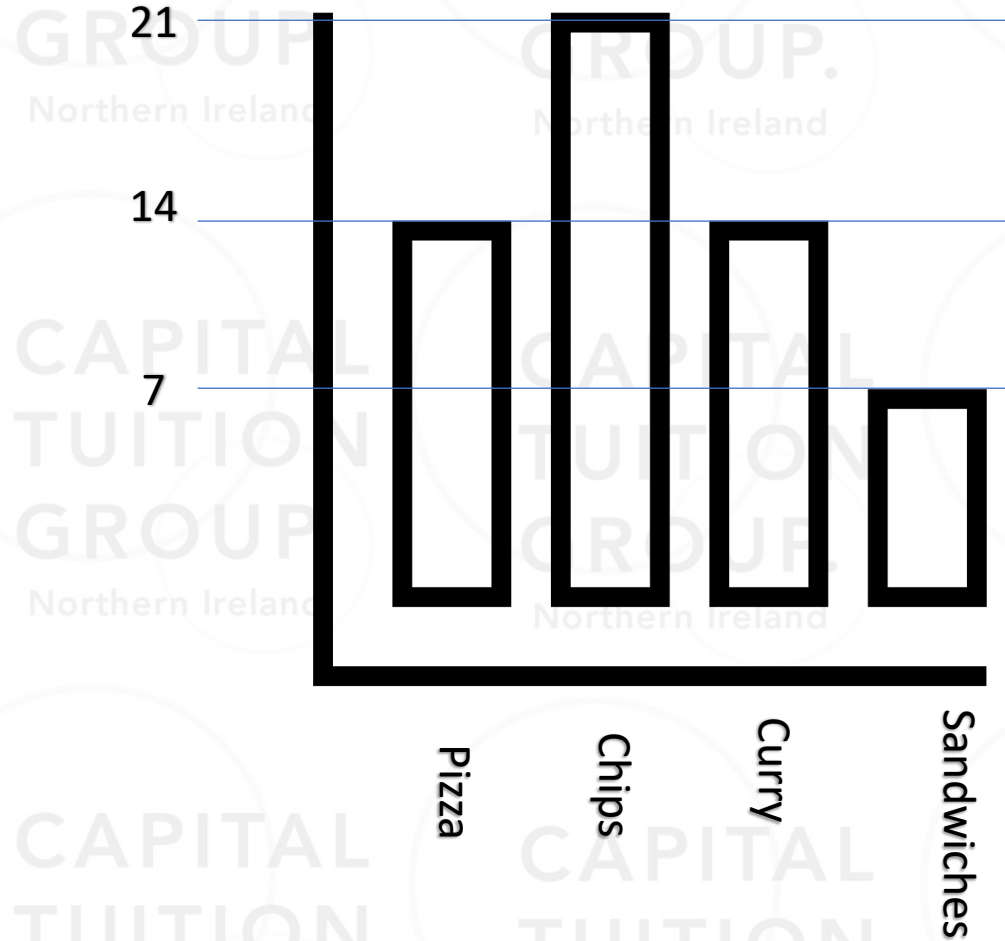
46) On the school trip, for every 10 children you need 2 adults. How many adults would be needed for 25 children?

- A) 12 adults
- B) 3 adults
- C) 6 adults
- D) 2 adults

47) The graph shows which foods the children in P4 chose as their favourite.

How many people chose either curry, sandwiches or pizza as their favourite food?

- A) 35
- B) 42
- C) 21
- D) 28



48) Here are the ingredients for a Spaghetti Bolognese

Spaghetti Bolognese (serves 6)



660g mince

2 packets of spaghetti

180g onions

480g chopped tomatoes

360g ragu

540g spinach

How much mince would you need to serve 10 people?

- A) 1200g B) 1600g C) 1100g D) 1250g

49) If I used 270g of spinach in my recipe, how many grams of chopped tomatoes would I need?

- A) 540g B) 240g C) 320g D) 120g

50) Here is a bus timetable. Some of it has been water damaged.

Newry	09:00 dep.	10:35 dep.	13:10 dep	15:45 dep
Banbridge	09:25 arr/dep	10:10 arr/d	13:45 arr/dep	16:20 arr/dep
Lisburn			14:13 arr/dep	16:48 arr/dep
Belfast			14:32 arrive	17:07 arrive

What time would the 10:35 bus from Newry arrive in Lisburn?

- A) 10:38 B) 11:38 C) 11:08 D) 11:58

51) Here is a schedule of a football match:

Warm Up: 2:30 – 2:45

First half: 3:00 – 3:45

Second half: 4:00 – 4:45

Cool down: 5:00 - 5:15

Across three games, how much time is spend warming up and cooling down?

A) 60 minutes

B) 120 minutes

C) 1h 20 minutes

D) 1h 30 minutes.

52) How many halves of football equal 450 minutes?

A) 5

B) 8

C) 10

D) 12

53) At the Olympics, five athletes took part in 3 events. Use the table to figure out the placings of the athletes in order to answer the question below.

Player	100m Sprint	Javelin throw.	10,000m run.
Emma	14.2s	33m	34:30
Carly	13.5s	24m	33:30
Jonah	13.8s	27m	32:50
Olivia	13.9s	23m	33:20
Reece	14.1s	28m	35:10

Position	1 st	2 nd	3 rd	4 th	5 th
Points awarded	10	8	6	4	2

Which athlete earned the most points?

A) Emma

B) Carly

C) Jonah

D) Olivia

E) Reece

54) A square has an area of $81m^2$.

What is the length of one of the sides?

- A) 6m B) 9m C) 9mm D) 8mm

55) Three golden retrievers play in the park, these are their ages.

Calculate their *mean* age.



6

3

9

- A) 7 B) 6

C) 8

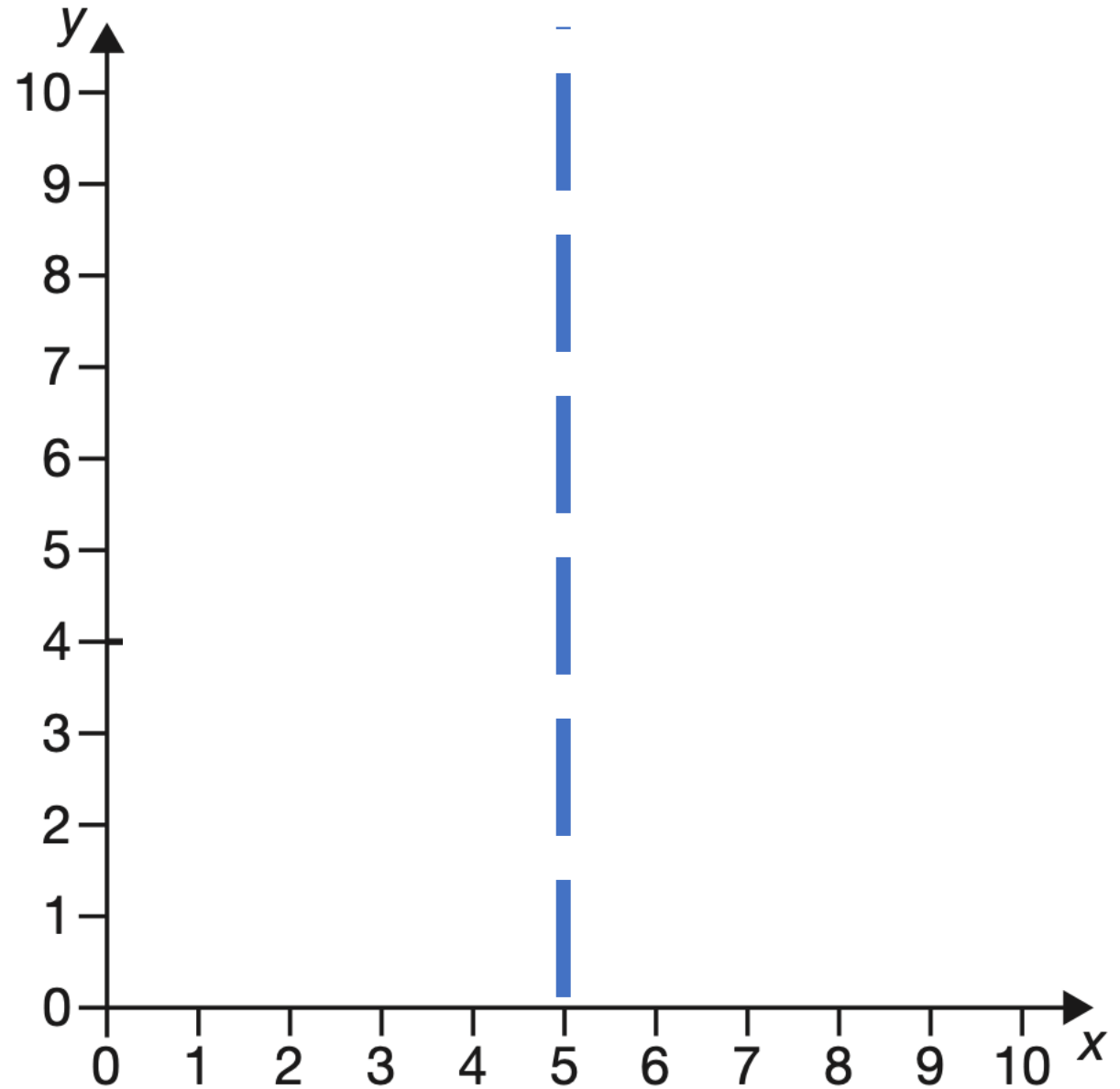
D) 6

56) This mirror line is drawn on a coordinate grid.

The point $(1, 7)$ is reflected in the mirror line.

What are the coordinates of its reflection?

- A) $(9, 7)$ B) $(7, 1)$
B) $(4, 7)$ D) $(7, 7)$



57) John spends £8.70 on two slices of pizza. He then spends £5.35 on a baguette.

How much more does a baguette cost than one slice of pizza?

A) £10.70

B) £0.80

C) £1.00


D) £1.50

For questions 58–62, you have to write your answers in the boxes provided on your answer sheet. The units of measurement have been given.

58) The vet monitored the puppy's weight across 8 weeks.


How much more did the puppy weight in Week 8 compared to week 1.

0.12 kg



Week 1

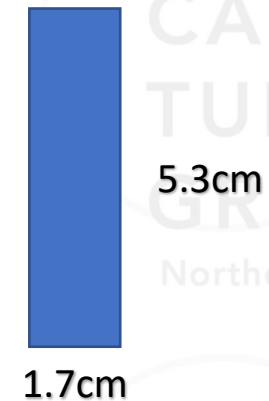

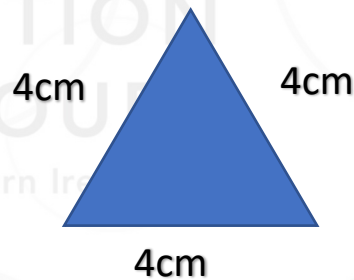
5.61 kg



Week 8

60) Jenny was 18 minutes late for the train at 3.12pm, the next train was one hour after the one she missed. **How long did she have to wait for the next train?**

61) Look at the shapes below:



What is the perimeter of the shape that has the largest perimeter?

62) This chart shows the distance between different cities/towns in England.

What is the distance between Liverpool and Carlisle?

York	x	x	x	x	x	x
Carlisle	115 miles	x	x	x	x	x
Newcastle	85 miles	60 miles	x	x	x	x
Liverpool	102 miles	124 miles	174 miles	x	x	x
Birmingham	134 miles	195 miles	206 miles	99 miles	x	x
London	211 miles	300 miles	282 miles	212 miles	117 miles	x
	York	Carlisle	Newcastle	Liverpool	Birmingham	London