

English Practice Test

In these types of questions, you are looking for either **one** punctuation mistake or **no** punctuation mistake.

Choose which group of words you think has the mistake in it and mark its letter on your answer sheet.

If you can't find a mistake, mark **N**.

1) The three Children walked down to the park.

A	B	C	D	N
---	---	---	---	---

2) In the morning, we found ourselves super hungry.

A	B	C	D	N
---	---	---	---	---

3) She really wanted an ice cream in the sun.

A	B	C	D	N
---	---	---	---	---

4) Peter and james were excited for the show.

A	B	C	D	N
---	---	---	---	---

Read the text below to yourself before answering the questions.

On Thursday, there was an incredible delivery of ready-meals to the store. Last week, they had all sold out except for the casserole. There was a complaint on the Tuesday therefore all those meals were removed from the shelves, away from the customers. Unfortunately, this was also the manager's day off which meant that the customer was incredibly unhappy. Luckily, the issue had been rectified by the supplier, who had reviewed the ingredients before distributing the new set of meals out to stores this week.

Consider the multiple-choice answers for this question. Choose **one** answer from the options below and mark its letter on your answer sheet.

5) *Which day was the manager's day off?*

- A) Thursday
- B) Wednesday
- C) Tuesday
- D) Monday

Read the text below to yourself before answering the questions.

On Thursday, there was an incredible delivery of ready-meals to the store. Last week, they had all sold out except for the casserole. There was a complaint on the Tuesday therefore all those meals were removed from the shelves, away from the customers. Unfortunately, this was also the manager's day off which meant that the customer was incredibly unhappy. Luckily, the issue had been rectified by the supplier, who had reviewed the ingredients before distributing the new set of meals out to stores this week.

Consider the multiple-choice answers for this question. Choose **one** answer from the options below and mark its letter on your answer sheet.

6) Which word tells you how the customer was **feeling**?

- A) Luckily
- B) Unfortunately
- C) Complaint
- D) Unhappy

Read the text below to yourself before answering the questions.

On Thursday, there was an incredible delivery of ready-meals to the store. Last week, they had all sold out except for the casserole. There was a complaint on the Tuesday therefore all those meals were removed from the shelves, away from the customers. Unfortunately, this was also the manager's day off which meant that the customer was incredibly unhappy. Luckily, the issue had been rectified by the supplier, who had reviewed the ingredients before distributing the new set of meals out to stores this week.

Consider the multiple-choice answers for this question. Choose **one** answer from the options below and mark its letter on your answer sheet.

7) Which word is closest to the meaning of rectified?

- A) Stop
- B) Cease
- C) Amend
- D) Allow

Read the text below to yourself before answering the questions.

On Thursday, there was an incredible delivery of ready-meals to the store. Last week, they had all sold out except for the casserole. There was a complaint on the Tuesday therefore all those meals were removed from the shelves, away from the customers. Unfortunately, this was also the manager's day off which meant that the customer was incredibly unhappy. Luckily, the issue had been rectified by the supplier, who had reviewed the ingredients before distributing the new set of meals out to stores this week.

For this question, you have to **write your answer** in the box provided on your answer sheet (box 7).

7) Which **one** word from the text means 'assess'?

Read the text below to yourself before answering the questions.


On Thursday, there was an incredible delivery of ready-meals to the store. Last week, they had all sold out except for the casserole. There was a complaint on the Tuesday therefore all those meals were removed from the shelves, away from the customers. Unfortunately, this was also the manager's day off which meant that the customer was incredibly unhappy. Luckily, the issue had been rectified by the supplier, who had reviewed the ingredients before distributing the new set of meals out to stores this week.

For this question, you have to **write your answer** in the box provided on your answer sheet (box 8). *There are multiple possible answers to this question.*

8) Write down an adjective from the text above.

Maths Practice Test

8)



What is the time shown on the clock?


A) 3:45

B) 4:00

C) 12:20

D) 12:04

9)



What is the time shown on the clock?

A) 11:09

B) 11:05

C) 2:09

D) 2:45

10)

Lucy	M M M M M M M M M M
Tom	M M M M
Caoimhe	M M M M M M M M M M M M N
Sam	M M M M M M M N

The pupils were given merits in class for completing their homework.

This pictogram shows their chart.

Caoimhe has 25 merits.

How many merits did Sam have?

- A) $7 \frac{1}{2}$ B) 16 C) 17 D) 15

11)

Lucy	M	M	M	M	M	M	M	M	M	M	M		
Tom	M	M	M	M									
Caoimhe	M	M	M	M	M	M	M	M	M	M	M	M	N
Sam	M	M	M	M	M	M	M	N					

The pupils were given merits in class for completing their homework.

This pictogram shows their chart.

Caoimhe has 25 merits.

How many more merits did Lucy have than Tom?

- A) 6
- B) 12
- C) 5
- D) 4

12) A club starts up 4 new football teams.

There are 22 players in each team.

How many players are there in **total**?

- A) 4 B) 22 C) 88 D) 82
-

13) The coach set out three rows of cones.

There are 17 cones in each row.

How many cones are there in **total**?

- A) 21 B) 62 C) 51 D) 34

14) 40% of the apples in the truck were bad.

There were 120 apples in the truck.

How many of the apples were bad?

A) 36

B) 30

C) 40

D) 48

15) This chart shows the height of four items.

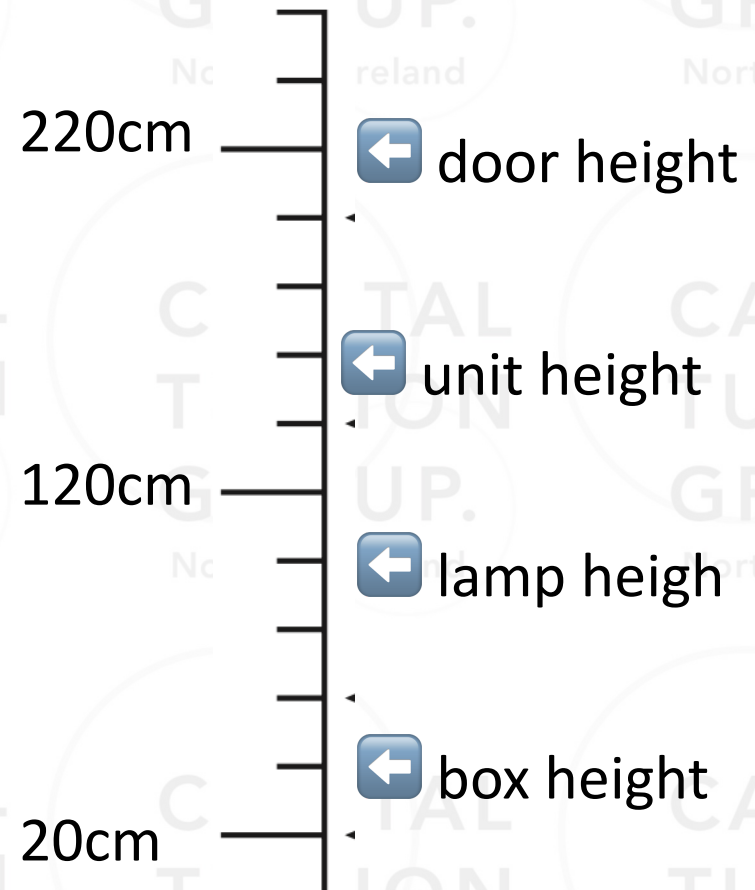
How much shorter was the box than the unit?

A) 100cm

B) 120cm

C) 160cm

D) 60cm



15) This chart shows the height of four items.

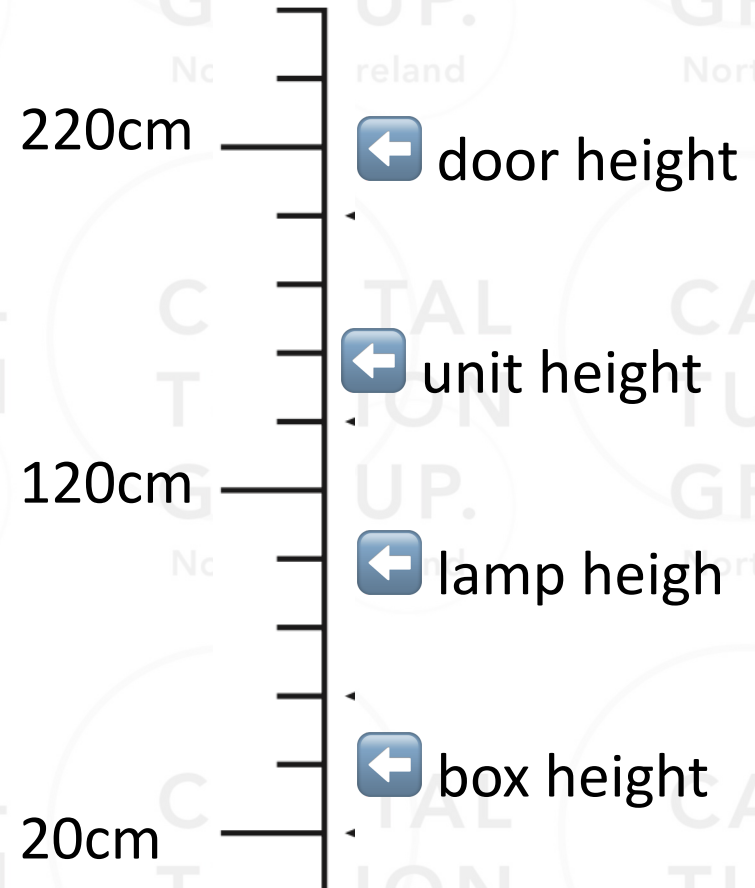
If you stacked the lamp on top of the unit, what would the total height be?

A) 220cm

B) 300cm

C) 240cm

D) 260cm



Answers!

CAPITAL
TUITION
GROUP.

Northern Ireland

CAPITAL
TUITION
GROUP.

Northern Ireland

CAPITAL
TUITION
GROUP.

Northern Ireland

CAPITAL
TUITION
GROUP.

Northern Ireland

CAPITAL
TUITION
GROUP.

Northern Ireland

CAPITAL
TUITION
GROUP.

Northern Ireland

CAPITAL
TUITION
GROUP.

Northern Ireland

CAPITAL
TUITION
GROUP.

Northern Ireland

CAPITAL
TUITION
GROUP.

Northern Ireland

CAPITAL
TUITION
GROUP.

Northern Ireland

CAPITAL
TUITION
GROUP.

Northern Ireland

CAPITAL
TUITION
GROUP.

Northern Ireland

CAPITAL
TUITION
GROUP.

Northern Ireland

CAPITAL
TUITION
GROUP.

Northern Ireland

CAPITAL
TUITION
GROUP.

Northern Ireland

English Practice Test

In these types of questions, you are looking for either **one** punctuation mistake or **no** punctuation mistake.

Choose which group of words you think has the mistake in it and mark its letter on your answer sheet.

If you can't find a mistake, mark **N**.

1) The three Children walked down to the park.

A	B	C	D	N
---	---	---	---	---

2) In the morning, we found ourselves super hungry.

A	B	C	D	N
---	---	---	---	---

3) She really wanted an ice cream in the sun.

A	B	C	D	N
---	---	---	---	---

4) Peter and james were excited for the show.

A	B	C	D	N
---	---	---	---	---

Read the text below to yourself before answering the questions.

On Thursday, there was an incredible delivery of ready-meals to the store. Last week, they had all sold out except for the casserole. There was a complaint on the Tuesday therefore all those meals were removed from the shelves, away from the customers. Unfortunately, this was also the manager's day off which meant that the customer was incredibly unhappy. Luckily, the issue had been rectified by the supplier, who had reviewed the ingredients before distributing the new set of meals out to stores this week.

Consider the multiple-choice answers for this question. Choose **one** answer from the options below and mark its letter on your answer sheet.

5) *Which day was the manager's day off?*

- A) Thursday
- B) Wednesday
- C) **Tuesday**
- D) Monday

Read the text below to yourself before answering the questions.

On Thursday, there was an incredible delivery of ready-meals to the store. Last week, they had all sold out except for the casserole. There was a complaint on the Tuesday therefore all those meals were removed from the shelves, away from the customers. Unfortunately, this was also the manager's day off which meant that the customer was incredibly unhappy. Luckily, the issue had been rectified by the supplier, who had reviewed the ingredients before distributing the new set of meals out to stores this week.

Consider the multiple-choice answers for this question. Choose **one** answer from the options below and mark its letter on your answer sheet.

6) Which word tells you how the customer was **feeling**?

- A) Luckily
- B) Unfortunately
- C) Complaint
- D) **Unhappy**

Read the text below to yourself before answering the questions.

On Thursday, there was an incredible delivery of ready-meals to the store. Last week, they had all sold out except for the casserole. There was a complaint on the Tuesday therefore all those meals were removed from the shelves, away from the customers. Unfortunately, this was also the manager's day off which meant that the customer was incredibly unhappy. Luckily, the issue had been rectified by the supplier, who had reviewed the ingredients before distributing the new set of meals out to stores this week.

Consider the multiple-choice answers for this question. Choose **one** answer from the options below and mark its letter on your answer sheet.

7) Which word is closest to the meaning of rectified?

- A) Stop
- B) Cease
- C) Amend
- D) Allow

Read the text below to yourself before answering the questions.

On Thursday, there was an incredible delivery of ready-meals to the store. Last week, they had all sold out except for the casserole. There was a complaint on the Tuesday therefore all those meals were removed from the shelves, away from the customers. Unfortunately, this was also the manager's day off which meant that the customer was incredibly unhappy. Luckily, the issue had been rectified by the supplier, who had reviewed the ingredients before distributing the new set of meals out to stores this week.

For this question, you have to **write your answer** in the box provided on your answer sheet (box 7).

7) Which **one** word from the text means 'assess'?

Read the text below to yourself before answering the questions.


On Thursday, there was an **incredible** delivery of ready-meals to the store. Last week, they had all sold out except for the casserole. There was a complaint on the Tuesday therefore all those meals were removed from the shelves, away from the customers. Unfortunately, this was also the manager's day off which meant that the customer was incredibly **unhappy**. Luckily, the issue had been rectified by the supplier, who had reviewed the ingredients before distributing the **new** set of meals out to stores this week.

For this question, you have to **write your answer** in the box provided on your answer sheet (box 8). *There are multiple possible answers to this question.*

8) Write down an adjective from the text above.

Maths Practice Test

8)



What is the time shown on the clock?


A) 3:45

B) 4:00

C) 12:20

D) 12:04

9)



What is the time shown on the clock?

A) 11:09

B) 11:05

C) 2:09

D) 2:45

10)

Lucy	M M M M M M M M M M
Tom	M M M M
Caoimhe	M M M M M M M M M M M M N
Sam	M M M M M M M N

The pupils were given merits in class for completing their homework.

This pictogram shows their chart.

Caoimhe has 25 merits.

How many merits did Sam have?

- A) 7 ½
- B) 16
- C) 17
- D) 15

11)

Lucy	M	M	M	M	M	M	M	M	M	M	M		
Tom	M	M	M	M									
Caoimhe	M	M	M	M	M	M	M	M	M	M	M	M	N
Sam	M	M	M	M	M	M	M	N					

The pupils were given merits in class for completing their homework.

This pictogram shows their chart.

Caoimhe has 25 merits.

How many more merits did Lucy have than Tom?

- A) 6
- B) 12
- C) 5
- D) 4

14) 40% of the apples in the truck were bad.

There were 120 apples in the truck.

How many of the apples were bad?

A) 36

B) 30

C) 40

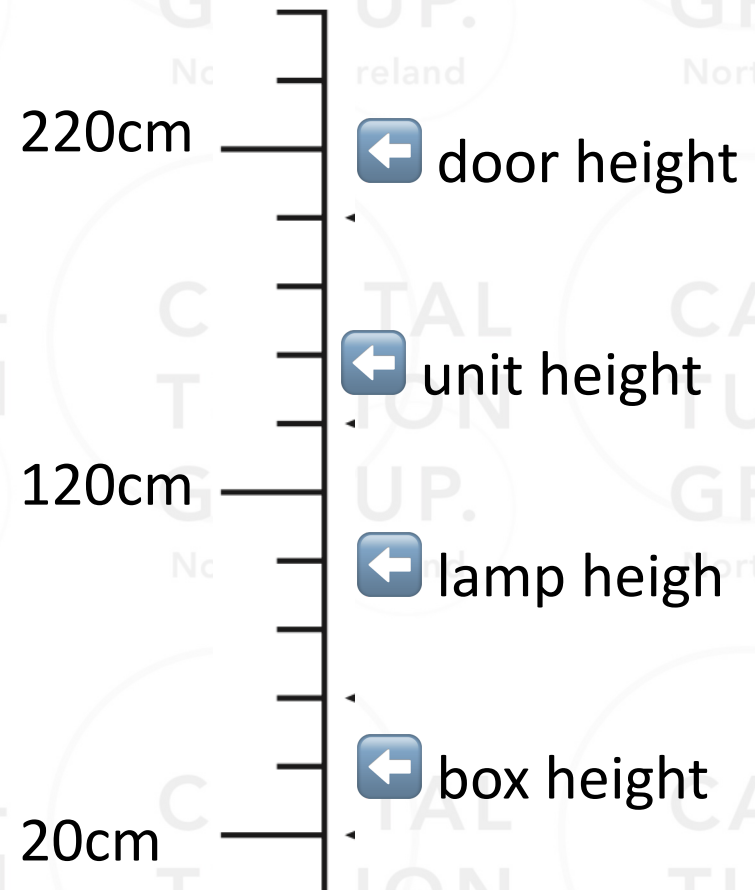
D) 48

15) This chart shows the height of four items.

How much shorter was the box than the unit?

- A) 100cm
- C) 160cm

- B) 120cm**
- D) 60cm



15) This chart shows the height of four items.

If you stacked the lamp on top of the unit, what would the total height be?

- A) 220cm
- C) 240cm

- B) 300cm
- D) 260cm**

